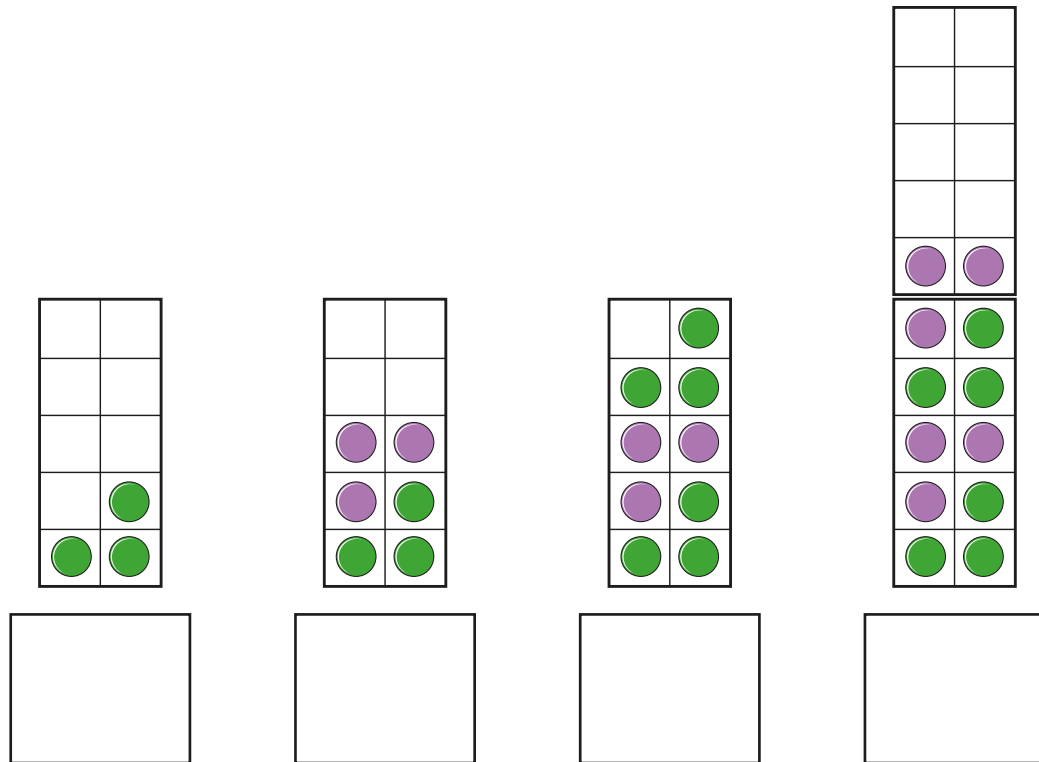
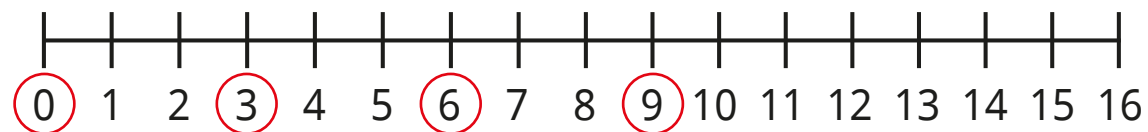




1 What numbers are shown?



2 Use the number line to help you complete the sentence.

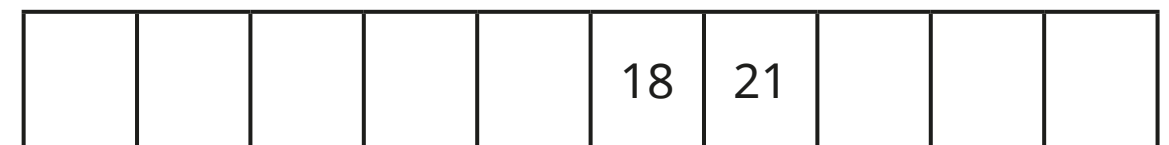



The circled numbers count up in jumps of

Draw circles on the number line to continue the pattern.



3 Complete the number tracks.



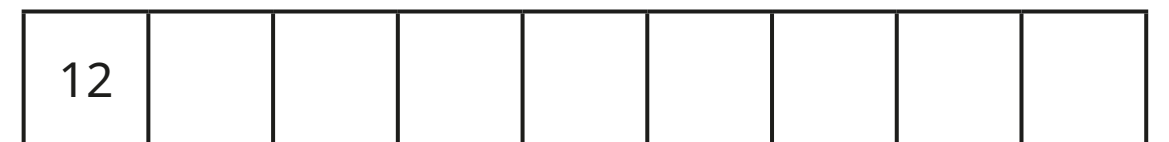
4 Jo has 12 stickers.



She collects 3 more stickers each day.

How many stickers will she have in 8 days?

Complete the number track to help you.



Jo will have stickers in 8 days.

- 5 Is each statement true or false?
Circle your answers.

a)

When you count in 3s from zero,
you will say the number 9

true

false

b)

When you count in 3s from zero,
you will say the number 11

true

false

How do you know?

- 6 Count up in 3s from 3


Colour the numbers you say on the
number grid.

1	2	3	4	5	6	7	8	9	10
11	12	13	14	15	16	17	18	19	20
21	22	23	24	25	26	27	28	29	30
31	32	33	34	35	36	37	38	39	40
41	42	43	44	45	46	47	48	49	50

- 7 Ron, Kim and Sam are counting.

- a) Ron counts in 2s from zero.


Fill in the number track to show
the numbers Ron says.



--	--	--	--	--	--

- b) Kim counts in 3s from zero.


Fill in the number track to show
the numbers Kim says.



--	--	--	--	--	--

- c) Sam adds Ron and Kim's numbers together.

Fill in the number track to show
the numbers Sam says.



--	--	--	--	--	--

What do you notice about Sam's
number pattern?