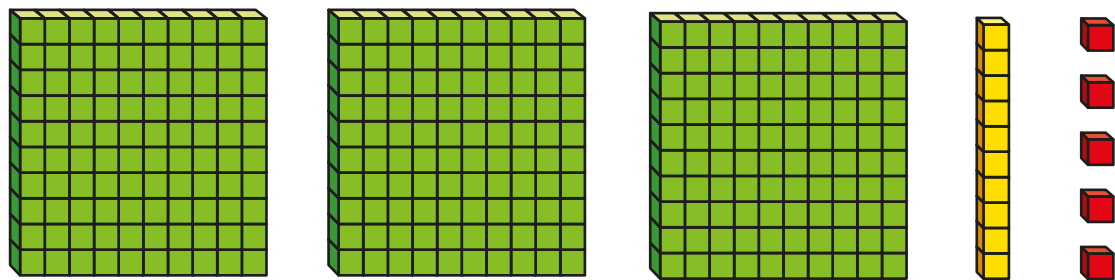


Find 1, 10 or 100 more or less



1 Annie uses base 10 to make a number.



a) What is Annie's number?

Annie's number is

b) What is 100 more than Annie's number?

100 more than Annie's number is

c) What is 10 more than Annie's number?

10 more than Annie's number is

d) What is 1 more than Annie's number?

1 more than Annie's number is

2 Here is a place value chart.

Hundreds	Tens	Ones
<div>●● ●●</div>	<div>●● ●● ●● ●● ●</div>	<div>●</div>

a) What number is shown?

b) What is 100 more than the number?

What is 10 more than the number?

What is 1 more than the number?

c) What is 100 less than the number?

What is 10 less than the number?

What is 1 less than the number?

3 What is 100 more than each number?

a) 700

c) 590

b) 385

d) 47

4 What is 10 more than each number?

- a) 362  c) 703
- b) 180  d) 695



5 What is 10 less than each number?

- a) 789  c) 300
- b) 245  d) 404

6 Complete the sentences.

- a) 100 more than 763 is
- b)  is 100 more than 765
- c)  is 100 less than 503
- d) 1 less than 300 is
- e) 10 less than 109 is
- f)  is 10 less than 972
- g)  is 1 less than 699

7 Tom makes a number on a place value chart, but one of the counters slips off the chart.

Hundreds	Tens	Ones
		

What could Tom's number have been?

\_\_\_\_\_

8 Complete the table.

100 less	10 less	1 less	Number	1 more	10 more	100 more
			473			
						398
	890					

9 Kim thinks of a number.

100 less than Kim's number is 900

What is 10 less than Kim's number?