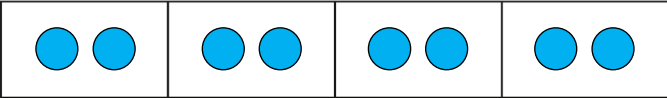

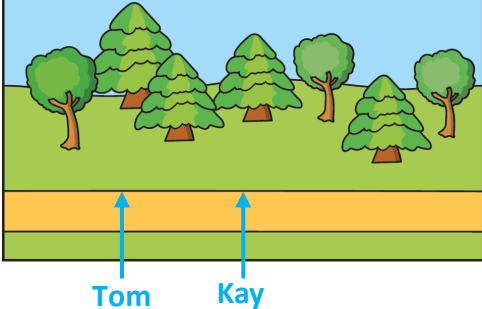



Y2 – Summer – Block 1 – Step 6 – Find a quarter Answers

Question	Answer												
1	<p>a) </p> <p>b) 8 counters are shared equally into 4 groups. There are 2 counters in each group.</p> <p>c) 2 It is the number of counters in each group.</p>												
2	<p>a) </p> <p>b) 3</p>												
3	<p>a), b) </p>												
4	<p>a) 5 b) 4</p>												
5													
6	3												
7	<table border="1" data-bbox="211 1566 743 1736"> <thead> <tr> <th>Number</th> <th><math>\frac{1}{2}</math> of number</th> <th><math>\frac{1}{4}</math> of number</th> </tr> </thead> <tbody> <tr> <td>8</td> <td>4</td> <td>2</td> </tr> <tr> <td>20</td> <td>10</td> <td>5</td> </tr> <tr> <td>24</td> <td>12</td> <td>6</td> </tr> </tbody> </table>	Number	$\frac{1}{2}$ of number	$\frac{1}{4}$ of number	8	4	2	20	10	5	24	12	6
Number	$\frac{1}{2}$ of number	$\frac{1}{4}$ of number											
8	4	2											
20	10	5											
24	12	6											
8	28												