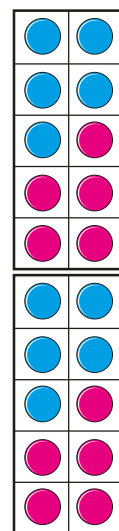
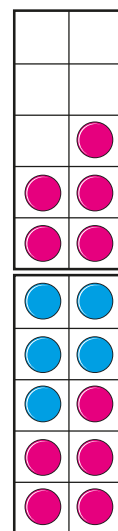
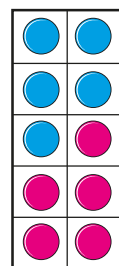
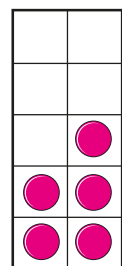


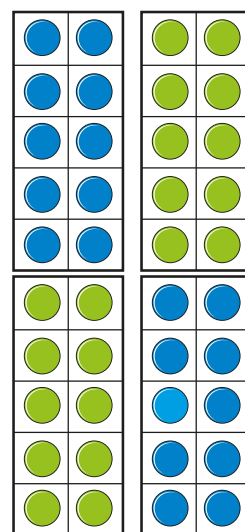
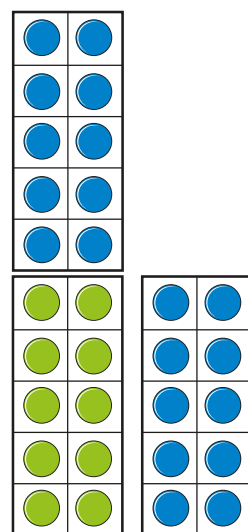
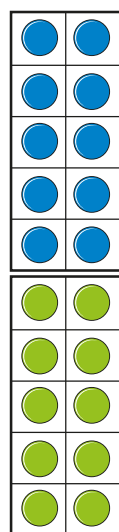
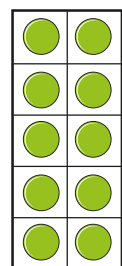
# The 5 and 10 times-tables

**1** What numbers are shown?

**a)**



**b)**



11/11/2019

What do you notice?

**2 a)** Complete the number tracks.



**b)** Circle the numbers that are in both number tracks.

What do you notice?

3 Here is a grid showing numbers from 51 to 100

51	52	53	54	55	56	57	58	59	60
61	62	63	64	65	66	67	68	69	70
71	72	73	74	75	76	77	78	79	80
81	82	83	84	85	86	87	88	89	90
91	92	93	94	95	96	97	98	99	100

**a)** Colour the numbers that are in the 10 times-table.

**b) Circle the numbers that are in the 5 times-table.**

What do you notice?

4 Tick the correct box for each number.

Number	In the 5 times-table, but not in the 10 times-table	In the 10 times-table but not in the 5 times-table	In both the 5 and 10 times-tables
35			
80			
65			
10			

Are there any columns that do not have a tick?  
Why?

5 Work out the multiplications.

a)  $2 \times 10 =$

b)  $4 \times 10 =$

$4 \times 5 =$

$8 \times 5 =$

What do you notice?

6 Complete the multiplications.

a)  $3 \times 10 =$    $\times 5$

b)   $\times 10 = 2 \times 5$

c)  $5 \times 10 =$    $\times 5$

d)   $\times 10 = 12 \times 5$

7 Write  $<$ ,  $>$  or  $=$  to compare the multiplications.

a)  $6 \times 5$    $6 \times 10$

b)  $8 \times 5$    $4 \times 10$

c)  $9 \times 5$    $4 \times 10$

d)  $4 \times 5$    $3 \times 10$

Did you need to work out the multiplications?