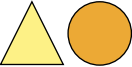

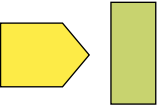


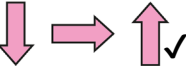

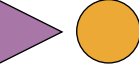
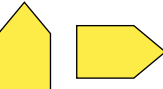



Question	Answer
1	<p>a) </p> <p>b) </p> <p>c) </p> <p>d) </p>
2	<p>a)  The triangle makes a half turn each time.</p> <p>b)  The arrow makes a quarter turn clockwise (or three-quarter turn anticlockwise) each time.</p> <p>c)  The triangle makes a quarter turn anticlockwise (or three-quarter turn clockwise) each time.</p>
3	<p>Yes Alternatively, the triangle makes a quarter turn anticlockwise each time.</p>
4	<p>a) The shape makes a half turn each time. b) The shape makes a quarter turn anticlockwise each time. or The shape makes a three-quarter turn clockwise each time. There are two ways to complete part b), but only one way to complete part a). If the direction of turn was included in part a), then it could be either clockwise or anticlockwise.</p>
5	<p>a) </p> <p>b) </p> <p>c) </p>
6	<p>a) No A square looks the same after no turn, a quarter turn, a half turn, a three-quarter turn or a full turn. Any shape looks the same after a full turn. b) child's shape pattern</p>