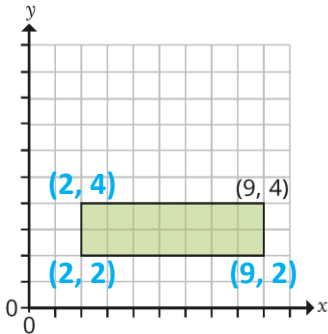
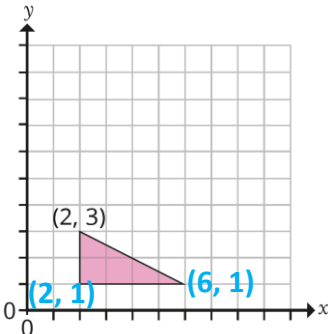
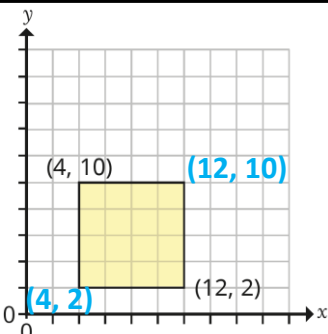


Question	Answer
1	
2	
3	
4	<p>a) (8, 6) (0, 9) (1, 7) (2, 1)</p> <p>b) (7, 2) (9, 7) (8, 8) (2, 10)</p> <p>Point B has the same x-coordinate as the given point and point C has the same y-coordinate as the given point.</p>
5	<p>P (12, 3)</p> <p>Q (5, 5)</p>
6	<p>A (2, 14)</p> <p>B (12, 2)</p> <p>C (7, 5)</p>
7	<p>(6, 4)</p>
8	<p>X (12, 3)</p> <p>Y (12, 1)</p>