

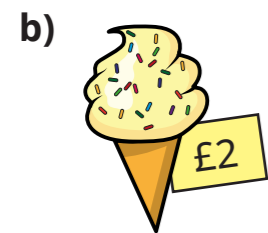
Find change




1 How much change would you get from a £10 note?



£ and p




£ and p



£ and p

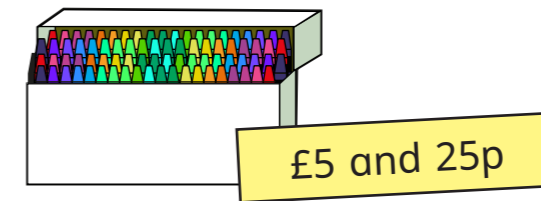


£ and p



£ and p

2 Annie buys these crayons.



She pays with this money.



She gets this change.



Has Annie been given the correct amount of change?

Explain your answer.

3 Huan buys a hot chocolate for £2 and 60p.

He pays with a £5 note.

How much change does he get?

£ and p

- 4 Dani buys a milkshake.
She pays with a £5 note.
She gets £3 and 40p change.
How much does the milkshake cost?

£ and p

- 5 Ms Hall has £9 to buy breakfast.
She gets £4 and 25p change.

Waffles	£4 and 75p
Omelette	£5 and 75p

Which breakfast does Ms Hall buy?

Ms Hall buys the _____ for breakfast.

- 6 A train ticket costs £3 and 60p.
A bus ticket costs £2 and 85p.
Mr Khan buys a train ticket and a bus ticket.
He pays with a £10 note.
How much change does he get?

£ and p

- 7 Mrs Dean buys a T-shirt.
She pays with a £10 note.
She gets four coins in change.
Each coin is different.



a) What is the lowest possible price of the T-shirt?

£ and p

b) What is the highest possible price of the T-shirt?

£ and p

Compare answers with a partner.