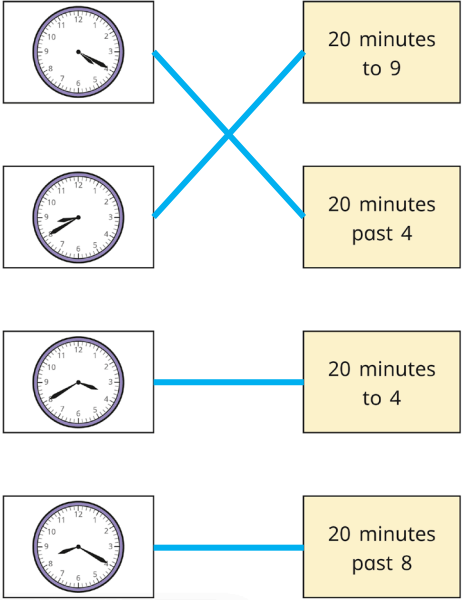




























Y2 – Summer – Block 2 – Step 5 – Tell the time to 5 minutes Answers

Question	Answer												
1													
2	<table border="1" style="width: 100%; border-collapse: collapse;"> <tbody> <tr> <td style="text-align: center;"></td> <td style="text-align: center;">5 minutes past 1</td> </tr> <tr> <td style="text-align: center;"></td> <td style="text-align: center;">20 minutes to 2</td> </tr> <tr> <td style="text-align: center;"></td> <td style="text-align: center;">20 minutes past 6</td> </tr> <tr> <td style="text-align: center;"></td> <td style="text-align: center;">10 minutes past 10</td> </tr> <tr> <td style="text-align: center;"></td> <td style="text-align: center;">5 minutes to 12</td> </tr> <tr> <td style="text-align: center;"></td> <td style="text-align: center;">15 minutes to 10</td> </tr> </tbody> </table> <p style="text-align: right; margin-top: 10px;">or quarter to 10</p>		5 minutes past 1		20 minutes to 2		20 minutes past 6		10 minutes past 10		5 minutes to 12		15 minutes to 10
	5 minutes past 1												
	20 minutes to 2												
	20 minutes past 6												
	10 minutes past 10												
	5 minutes to 12												
	15 minutes to 10												

Question	Answer
3	<p>a) </p> <p>b) </p> <p>c) </p> <p>d) </p> <p>e) </p> <p>f) </p> <p>g) </p> <p>h) </p>
4	<p>They are all correct. There are 15 minutes in quarter of an hour, so “quarter to” is the same as “15 minutes to”. 45 minutes past the hour is the same as 15 minutes to the next hour.</p>